


Dodawanie w zakresie 0 - 10.

1. Uzupełnij działania według podanego schematu.


$2+3=5$



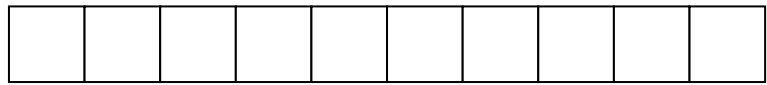
$6+1=$



$4+3=$



$5+4=$



$1+7=$




$2+8=$



$8+0=$

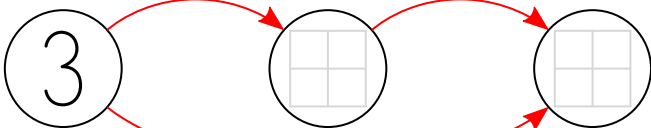


2. Uzupełnij grafy.




+4

+2



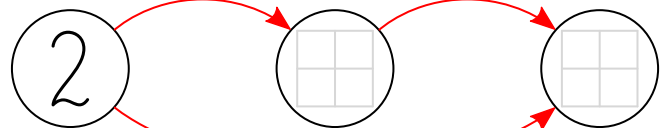
+

$3+4+2= \boxed{} = 3+ \boxed{}$



+3

+5



+

